

DPP – 1 (Heat Transfer)

Video Solution on Website:-

<https://physicsaholics.com/home/courseDetails/68>

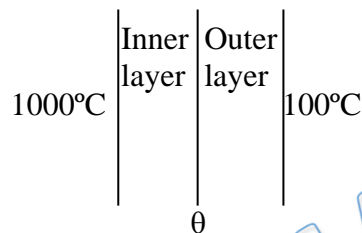
Video Solution on YouTube:-

<https://youtu.be/WImU84lgrfc>

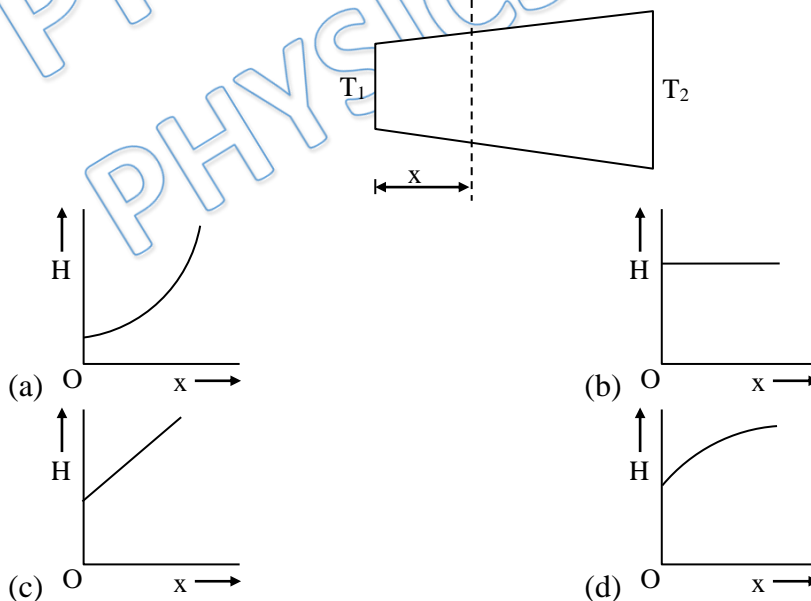
Written Solution on Website:-

<https://physicsaholics.com/note/notesDetails/83>

- Q 1. The temperature drop through a two layers furnace wall is 900°C . Each layer is of equal area of cross-section. Which of the following actions will result in lowering the temperature θ of the interface?



- (a) by increasing the thermal conductivity of outer layer
 (b) by increasing the thermal conductivity of inner layer
 (c) by increasing thickness of outer layer
 (d) by increasing thickness of inner layer
- Q 2. Radius of a conductor increases uniformly from left end to right end as shown in figure. Material of the conductor is isotropic and its curved surface is thermally isolated from surrounding. Its ends are maintained at temperatures T_1 and T_2 ($T_1 > T_2$). If, in steady state, heat flow rate is equal to H , then which of the following graphs is correct—

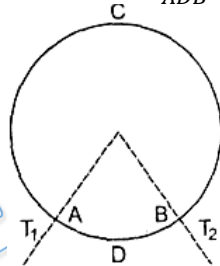




- Q 3. Two rods of length l and $2l$, thermal conductivities $2K$ and K are connected end to end. If cross-sectional areas of two rods are equal, then equivalent thermal conductivity of the system is
- (a) $(5/6)K$ (b) $1.5K$
(c) $1.2 K$ (d) $(8/9)K$

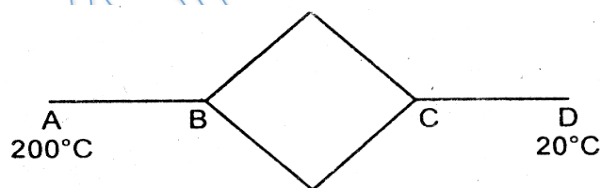
- Q 4. In conduction of steady state
- (a) Temperature does not change with time
(b) All parts of body are at same temperature
(c) There is no flow of heat
(d) There is no net absorption of heat at particular cross section

- Q 5. A ring consisting of two parts ADB and ACB of same conductivity K carries an amount of heat H . The ADB part is now replaced with another metal keeping the temperatures T_1 and T_2 constant. The heat carried increases to $2H$. What should be the conductivity of the new ADB part? Given $\frac{ACB}{ADB} = 3$



- (a) $\frac{7}{3}K$ (b) $2K$
(c) $\frac{5}{2}K$ (d) $3K$

- Q 6. Six identical conducting rods are joined as shown in figure. Points A and D are maintained at temperatures 200°C and 20°C respectively. The temperature of junction B will be

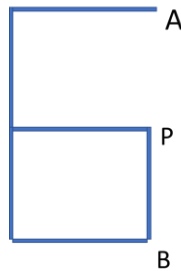


- (a) 120°C (b) 100° (c) 140°C (d) 80°C .

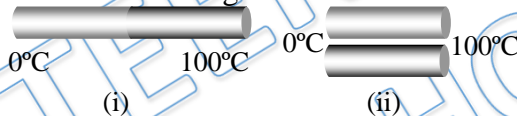
- Q 7. One end of a conducting rod is maintained at temperature 50°C and at the other end ice is melting at 0°C . The rate of melting of ice is doubled if :
- (a) the temperature is made 200°C and the area of cross-section of the rod is doubled
(b) the temperature is made 100°C and the length of the rod is made four times
(c) area of cross section of rod is halved and length is doubled
(d) the temperature is made 100°C and area of cross-section of rod and length both are doubled.



- Q 8. Six identical rods are connected as shown in figure. Temperature of A is maintained at 400 K that of B is maintained at 100 K . Find temperature of point P ? Heat transfer with surrounding is possible from point A and B only. All other surfaces are insulated.



- Q 9. One end of a copper rod of length 1.0 m and area of cross-sector 10^{-3} m^2 is immersed in boiling water and the other end in ice. If the coefficient of thermal conductivity of copper is $92 \text{ cal/ms } ^\circ\text{C}$ and the latent heat of ice is $8 \times 10^4 \text{ cal/kg}$, then the amount of ice which will melt in one minute is -
- (a) $9.2 \times 10^{-3} \text{ kg}$ (b) $8 \times 10^{-3} \text{ kg}$
 (c) $6.9 \times 10^{-3} \text{ kg}$ (d) $5.4 \times 10^{-3} \text{ kg}$
- Q 10. Two identical rods of metal are welded end to end as shown in figure (i), 20 calories of heat flows through it in 4 minutes. If the rods are welded as shown in figure (ii), the same amount of heat will flow through the rods in -



- (A) 1 minute (B) 2 minutes
 (C) 4 minutes (D) 16 minutes

Answer Key

Q.1 a, d	Q.2 b	Q.3 c	Q.4 a, d	Q.5 a
Q.6 c	Q.7 d	Q.8 150 K	Q.9 c	Q.10 a

PLUS **ICONIC****

- ✓ India's Best Educators
- ✓ Interactive Live Classes
- ✓ Structured Courses & PDFs
- ✓ Live Tests & Quizzes
- ✗ Personal Coach
- ✗ Study Planner

24 months	₹2,333/mo	>
No cost EMI	₹56,000	
18 months	₹2,625/mo	>
No cost EMI	₹47,250	
12 months	₹3,208/mo	>
No cost EMI	₹38,500	
6 months	₹4,667/mo	>
No cost EMI	₹28,000	

To be paid as a one-time payment

[View all plans](#)

 Add a referral code APPLY

PHYSICSLIVE

PLUS **ICONIC****

- ✓ India's Best Educators
- ✓ Interactive Live Classes
- ✓ Structured Courses & PDFs
- ✓ Live Tests & Quizzes
- ✗ Personal Coach
- ✗ Study Planner

24 months	₹2,100/mo	>
No cost EMI	+10% OFF ₹50,400	
18 months	₹2,363/mo	>
No cost EMI	+10% OFF ₹42,525	
12 months	₹2,888/mo	>
No cost EMI	+10% OFF ₹34,650	
6 months	₹4,200/mo	>
No cost EMI	+10% OFF ₹25,200	

To be paid as a one-time payment

[View all plans](#)

 Awesome! **PHYSICSLIVE** code applied ✗

Use code **PHYSICSLIVE** to get 10% OFF on Unacademy PLUS.

Written Solution

DPP- 1 Heat Transfer: conduction ,Heat current,
Combination of rods

By Physicsaholics Team

Solution.1

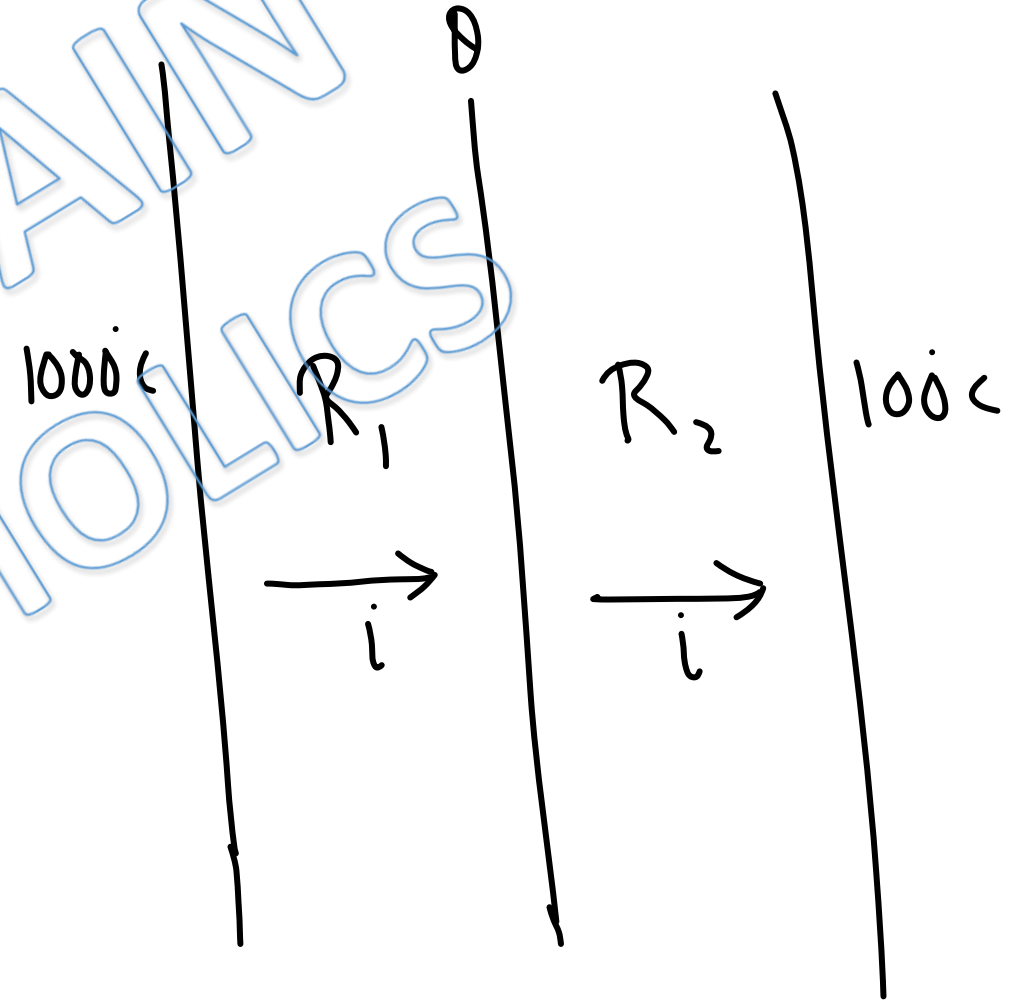
$$i = \frac{1000 - \theta}{R_1} = \frac{\theta - 100}{R_2}$$

$$\Rightarrow 1000 R_2 - R_2 \theta = R_1 \theta - 100 R_1$$

$$\Rightarrow \theta = \frac{1000 R_2 + 100 R_1}{R_1 + R_2}$$

$$= 100 + \frac{900 R_2}{R_1 + R_2}$$

$$= 100 + \frac{900}{1 + R_1/R_2}$$



to decrease θ we need to increase R_1/R_2 .

decrease $\theta \Rightarrow$ increase $\frac{R_1}{R_2} \Rightarrow$ increase $\frac{l_1 k_2}{k_1 l_2}$

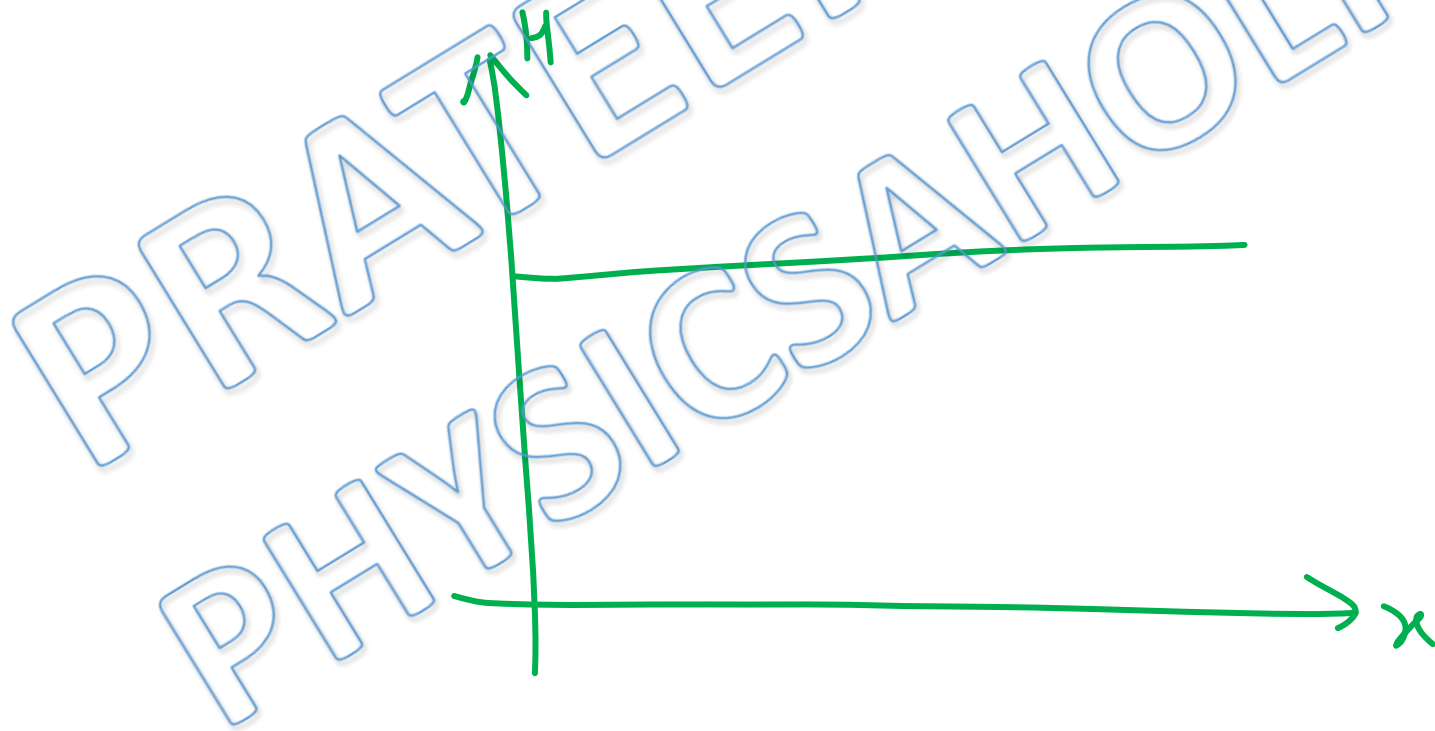
PRATEEK JAIN
PHYSICSAHOLICS

Ans (a, d)

Solution.2

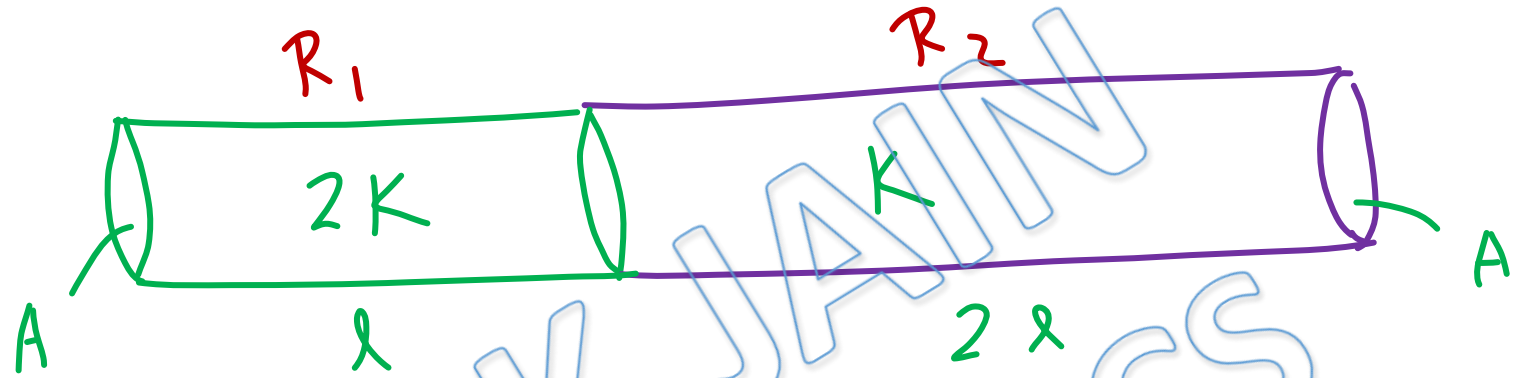
Thermal Current (Rate of heat flow) does not depend on cross sectional area.

It is same at all cross sections.



Ans.b

Solution.3



\equiv



$$R = R_1 + R_2 \Rightarrow \frac{3l}{K'A} = \frac{l}{2KA} + \frac{2l}{KA} = \frac{5l}{2KA}$$

$$\Rightarrow \frac{3}{K'} = \frac{5}{2K} \Rightarrow K' = \frac{6K}{5}$$

Ans(c)

Solution.4

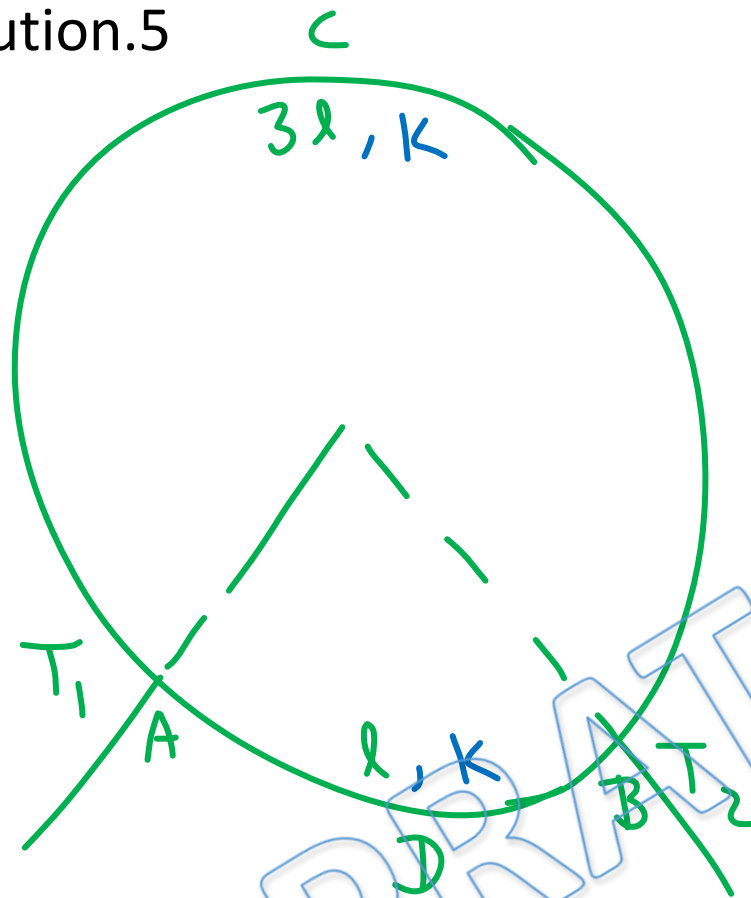
In steady state temperature of any point of conductor does not change with time.

Since $\Delta Q = m s \Delta T$

\Rightarrow no net heat absorption by any part of conductor.

Ans(a,d)

Solution.5



length of ACB = 3 × length of ADB

$$\Rightarrow R_{ACB} = 3 R_{ADB}$$

Thermal resistance

$$\Rightarrow H_{ACB} = \frac{1}{3} H_{ADB}$$

Rate of Heat transfer

$$\Rightarrow H_{ADB} = \frac{3H}{4}, \quad H_{ACB} = \frac{H}{4}$$

After replacing ADB →

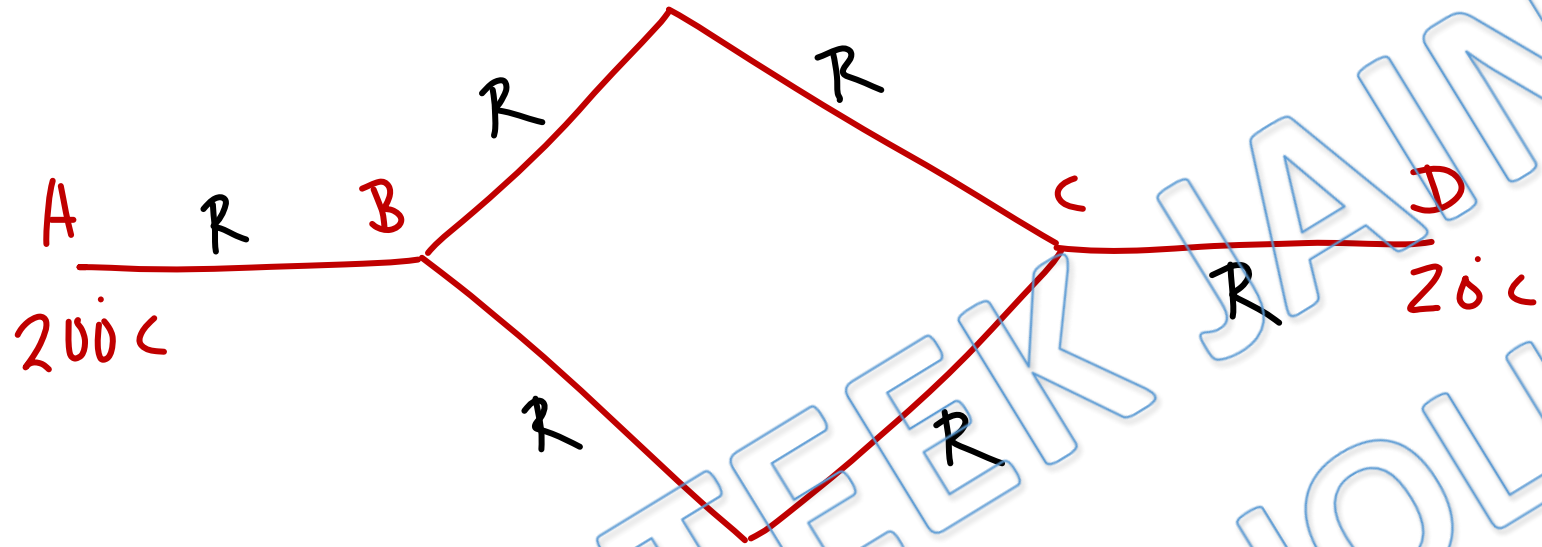
$$\text{net rate of heat transfer} = 2H, \quad H_{ACB} = \frac{H}{4} \Rightarrow \text{new } H_{ADB} = 2H - \frac{H}{4} = \frac{7H}{4}$$

$$\frac{\text{new } H_{ADB}}{\text{old } H_{ADB}} = \frac{K_{\text{new}}}{K} = \frac{7H/4}{3H/4} = 7/3$$

$$\Rightarrow K_{\text{new}} = \frac{7K}{3}$$

Ans.a

Solution.6



$i \rightarrow$ Thermal Current

$R \rightarrow$ Thermal resistance of one rod

net thermal resistance b/w A & D = $3R$

$$\Rightarrow \text{Thermal current in AB} = i = \frac{200 - 20}{3R} = \frac{60}{R} = \frac{200 - T_B}{R}$$

$$\Rightarrow T_B = 200 - 60 = 140^\circ\text{C}$$

Ans(c)

Solution.7

To double the rate of melting ice, it is required to double Rate of Heat flow.

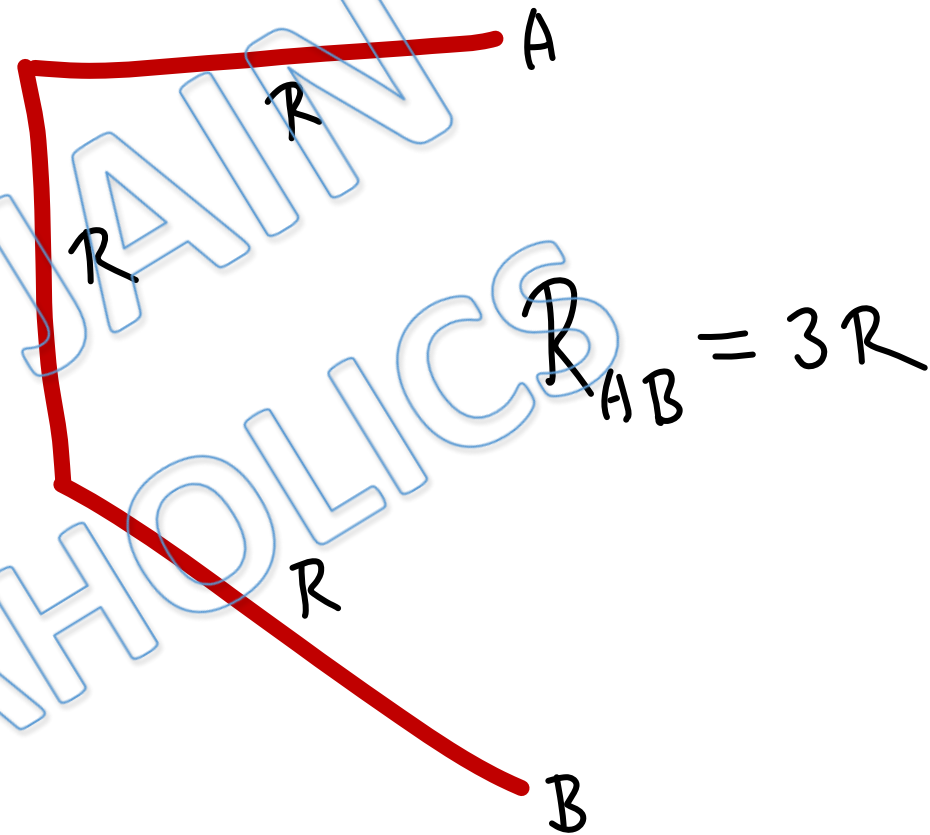
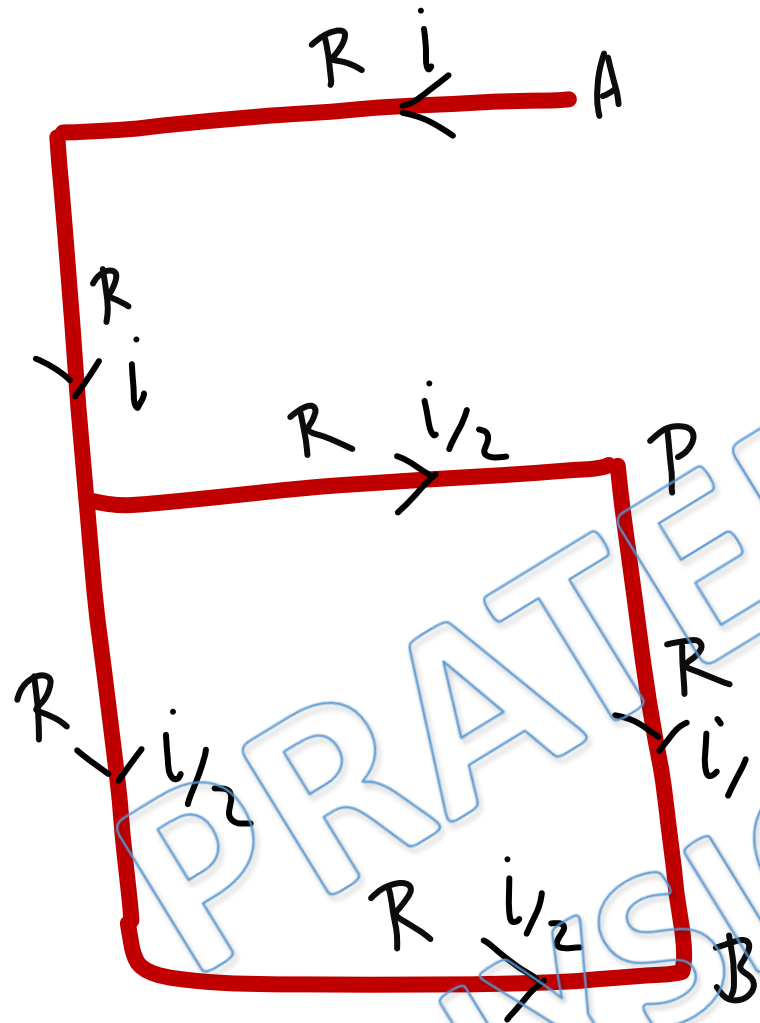
$$\text{Since } \frac{\Delta Q}{\Delta t} = \frac{KA(T - 0)}{\lambda}$$

(d) is correct option.

Ans.d

Solution.8 i \rightarrow Thermal Current

$R \rightarrow$ resistance of one rod.



$$i = \frac{\Delta T_{AB}}{3R} = \frac{300}{3R} = \frac{100}{R}, \quad \frac{i}{2} = \frac{\Delta T_{PB}}{R} \Rightarrow \frac{T_p - 100}{R} = \frac{100}{2R} \Rightarrow T_p = 150 \text{ K}$$

Ans.150K

Solution.9

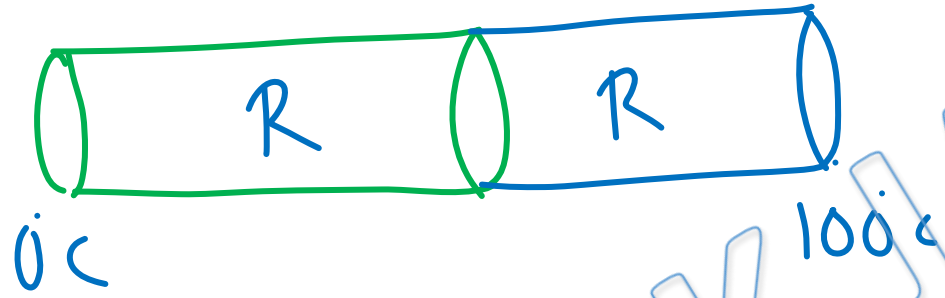
$$\frac{\Delta Q}{\Delta t} = \frac{KA \Delta T}{l} \Rightarrow \frac{mL}{\Delta t} = \frac{KA \Delta T}{l}$$

$$\Rightarrow \frac{m \times 8 \times 10^4}{60} = \frac{92 \times 10^{-3} (100 - 0)}{l}$$

$$\Rightarrow m = \frac{92 \times 6}{8 \times 10^4} \text{ Kg} = 6.9 \times 10^{-3} \text{ Kg}$$

Ans(c)

Solution.10

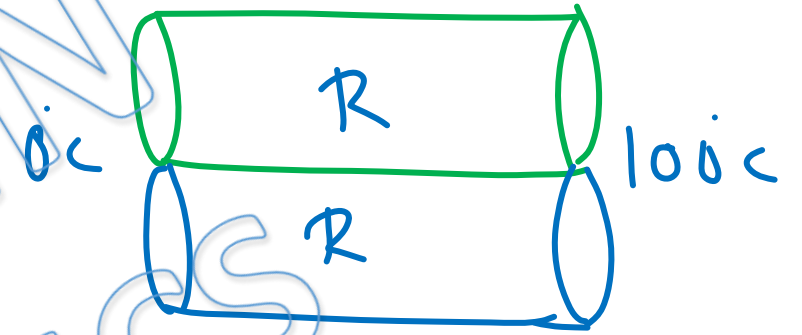


Case 1

$$\text{In Case 1} \rightarrow R_{\text{eff}} = 2R$$

$$\frac{\Delta\theta}{\Delta t} = \frac{\Delta\theta}{4 \text{ min}} = \frac{100}{2R}$$

$$\Rightarrow \frac{\Delta\theta \cdot R}{200} = 1 \text{ min}$$



Case 2

$$\text{In Case 2} \rightarrow R_{\text{eff}} = R/2$$

$$\frac{\Delta\theta}{\Delta t} = \frac{100}{R/2} = \frac{200}{R}$$

$$\Rightarrow \Delta t = \frac{\Delta\theta R}{200} = 1 \text{ min}$$

Ans(a)

For Video Solution of this DPP, Click on below link

Video Solution
on Website:-

<https://physicsaholics.com/home/courseDetails/68>

Video Solution
on YouTube:-

<https://youtu.be/WImU84Igrfc>

Written Solution
on Website:-

<https://physicsaholics.com/note/notesDetails/83>

 SUBSCRIBE



[@Physicsaholics](#)

[@Physicsaholics_prateek](#)

[@NEET_Physics](#)

[@IITJEE-Physics](#)

[physicsaholics.com](#)

[Unacademy](#)



CLICK

Chalo Niklo